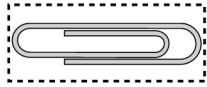


CISD Grade 2 Math Unit 14

Some questions (c) 2012 by CSCOPE.

Special note to teacher:


Have the students cut out the following items. They will use them to help answer the questions throughout the assessment.



paper clip

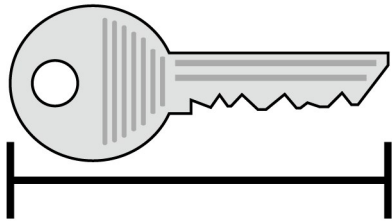


centimeter cube




square tile

- 1 A small paper clip is about 1 inch in length. Using the paper clip given, find the length of this key.




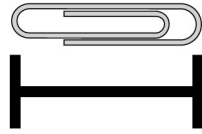
- A 2 inches
B 4 inches
C 6 inches
- 2 Using the paper centimeter cube given, find the length of the fish.




- F 1 centimeter
G 4 centimeters
H 7 centimeters
- 3 Which of the following could be used to best measure the height of the classroom door?
- A color tiles (inches)
B centimeter cubes (centimeters)
C yardstick (3 rulers or 3 feet)

- 4 If a ruler is a foot in length, about how long is the top of your desk?

5 A paper clip is about 1 inch in length. Select the object that is about 2 inches in length.




6



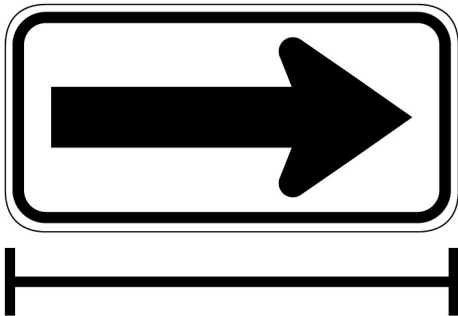
If 1 small paper clip is about one inch, what is the length of the pretzel?

- F 2 clips
- G 3 clips
- H 6 clips

- 7 Ida found an insect on a plant outside. Use the square tile provided to measure the length of this insect. What is the length of the insect?

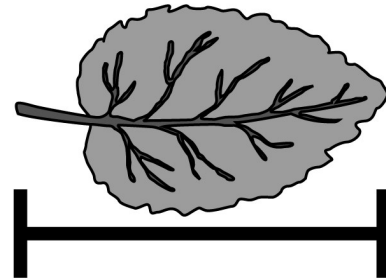


- A 8 square tiles
B 4 square tiles
C 1 square tile
- 8 Stan turned right to get to his friend's house. Use the centimeter cube provided to measure the length of this arrow sign. What is the length of the arrow sign?

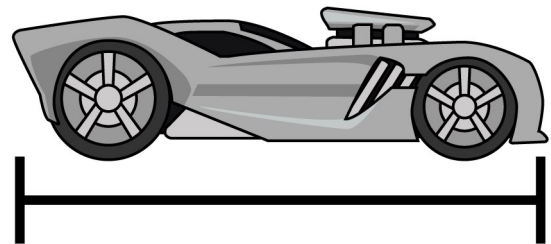


- F 6 cubes
G 10 cubes
H 13 cubes

- 9 Gina found lots of different leaves in the park. Use the centimeter cube to measure the length of this leaf. What is the length of the leaf?



- A 2 cubes
B 5 cubes
C 9 cubes
- 10 Use the centimeter cube provided to measure the length of the toy car. What is the length of the toy car?



- F 2 centimeters
G 5 centimeters
H 7 centimeters